

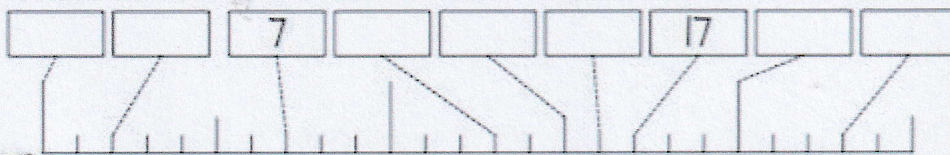


2.TŘ - DOKÁŽEŠ?

		3					
		13	14		16		18
							29



$13 + 3 = _ _$

$12 + 3 = _ _$

$14 + 3 = _ _$

$13 + 2 = _ _$

$13 + 4 = _ _$



$19 - 2 = _ _$

$18 - 2 = _ _$

$20 - 2 = _ _$

$19 - 1 = _ _$

$19 - 3 = _ _$

